


English

The Snail

Gail the snail was very sad.
She felt like she was too plain.
“I know how to fix this!” she




said in her brain. “I will stain my shell with paint!”
Gail did not want to wait. She got a pail and started
to paint. Oh no! It started to rain. The paint
washed off. Gail the snail was plain again! 😊 😊 😊

① Why was Gail sad?

② What did Gail do to her shell?

③ At the end, why was Gail plain again?

Positional WORDS



Read and complete the following directions:

1. Draw a black bat **above** the moon.
2. Draw three rocks **on top of** the grass.
3. Draw a cloud **beside** the moon.
4. Draw a pumpkin **under** the moon.
5. Color the circle in the picture yellow.


Tell about a fun day that you spent with a friend.

②

First,

③

Then,

①  I had a great time with my friend _____.

④

Later,

⑤♥

HINDI

प्र.1 : भाषा के रूप लिखकर दो-दो चित्र बनाइए।



प्र. 2 : र के विभिन्न रूपों के तीन – तीन शब्द लिखिए।

र →
र →
र →
र →

प्र.3 : दस सार्थक शब्द लिखिए, तथा दस निरर्थक शब्द लिखकर उनके सार्थक शब्द बनाकर लिखिए –

सार्थक शब्द	निरर्थक शब्द	निरर्थक से बने सार्थक शब्द
.....
.....
.....
.....
.....
.....
.....
.....
.....
.....

Science

1. Fill in the blanks :

- (a) Food prepared by the plant is called _____.
- (b) The Plants which have leaves throughout the year _____.
- (c) _____ plants traps insects.
- (d) _____ plant cannot perform photosynthesis.

2. Unscramble Words :

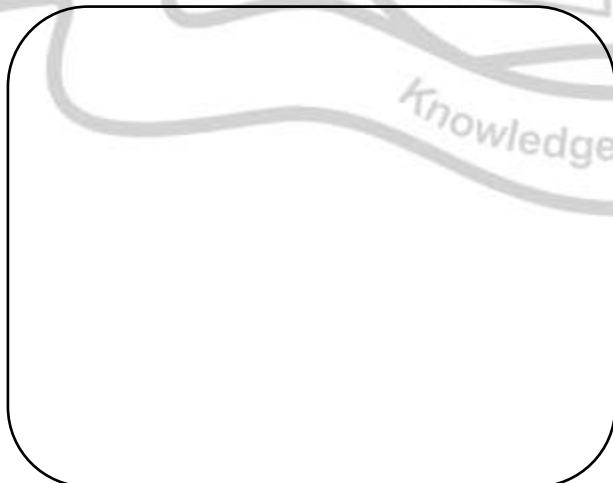
- 1. STORO : _____
- 2. RHUMSOOM : _____
- 3. OOBABM : _____
- 4. TACCUS : _____
- 5. STHESISTOPHOYN : _____

3. Learn long question answers of chapter 1, and 2.

4. Give two examples of each :

- 1. Floating Plants : _____, _____
- 2. Leaf Vegetable : _____, _____
- 3. Plants lacking chlorophyll : _____, _____
- 4. Hillside Plant : _____, _____
- 5. Grasses : _____, _____

5. Paste two different leaves and name them :



Maths

1. Write the number name according to the Indian & International number system for 7 6 5 7 2 7 0 0
2. The river Nile has a total drainage area of 3 2 5 7 2 3 0 square kilometers What is the value if you round it off to the nearest ten thousand?
3. What is the result of the following :
 - (a) $50000 + 10000 + 1000 + 100 + 50 + 8$ _____
 - (b) $60000 + 50000 + 2000 + 900 + 70 + 8$ _____
4. Find the place value of the underlined digit in the given number :
3 2 7 7 1 4 2 2 _____
5. What is the largest number that can be formed by using the digits 4 8,0,3,9,9,3,0 ? _____
6. Fill ups (in number form) :
 - (a) 4 4 1 3 9 more than two hundred twenty-five is _____
 - (b) _____ more than 3 4 5 5 is two hundred seventy-eight thousand five hundred eight three.
7. Write the Roman Numerals for :
 - (a) 45 _____
 - (b) 101 _____
 - (c) 99 _____
 - (d) 68 _____
8. Work out what number these Roman Numerals represent :
 - (a) XIV _____
 - (b) XV _____
 - (c) LX _____
 - (d) XLIV _____

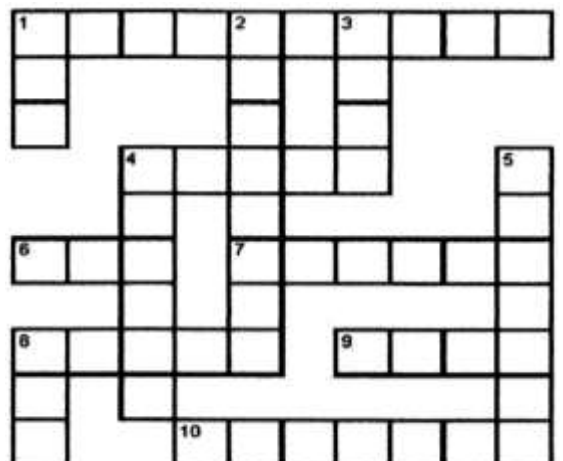
(c) Cross - Word

Across :

1. What's five times five?
4. What's twelve divided by four?
6. What's three minus two?
7. What's three plus two plus six?
8. What's four plus three?
9. What's seven minus three?
10. Twelve _____ by four is three.

Down :

1. What's one plus one?
2. What's twenty minus seven?
3. What's ten divided by two?
4. What's two times two times three?
5. What's ten times ten?



Social Studies (Paste in the SST Notebook)

1. **On the political map of India mark the following :**

- (a) Colour seven sisters with green colour and write their capital.
- (b) Colour orange the state you live in and mark the neighbouring states.
- (c) Mark all the neighbouring countries and oceans of India?

2. **Write a short paragraph on your state Rajasthan. Collect information and using headings given below prepare a scrapbook :**

- (i) Location
- (ii) Area
- (iii) Population
- (iv) Festival
- (v) Culture
- (vi) Tourism

